

## Year 5 maths – Summer 2 Week beginning: 29.6.20

Theme	<b>Lesson 1 of 2</b> <b>Roman Numerals</b> To write Roman numerals to 1000	<b>Lesson 2 of 2</b> <b>Roman Numerals</b> To write thousands numbers in Roman numerals	<b>Lesson 1 of 12</b> <b>CONSOLIDATION LESSON</b> <b>Formal methods</b> Addition within 1,000,000	<b>Lesson 2 of 12</b> <b>CONSOLIDATION LESSON</b> <b>Formal methods</b> Addition and subtraction	<b>Lesson 3 of 12</b> <b>CONSOLIDATION LESSON</b> <b>Word problems</b> To solve addition and subtraction word problems
Factual fluency (to aid fluency)	<b>Practise comparing numbers using multiplication <a href="#">activity</a></b>	<b>Practise choosing multiples <a href="#">activity</a></b>	<b>Practise multiplication patterns <a href="#">activity</a></b>	<b>Practise estimating products <a href="#">activity</a></b>	<b>Practise estimating products <a href="#">activity</a></b>
<p><b>Problem/ activity of the day</b></p> <p><b>Remember, just like in class, you can still show the depth of your knowledge</b></p> <p><b><a href="#">LINK</a></b></p>	<p><b>(Lesson 1 resources below)</b> <b>MAKING LINKS:</b> Last week we solved problems involving volume. Today we will be writing Roman numerals up to 1000.</p> <p><b>THINK: (support below)</b> Can you help me with this problem? My friend says all Roman numerals are based around just seven symbols, I, V, L, X, C, D and M. Is that true?</p> <p>Our problem is in the textbook on page 268. Look at it now.</p> <p><b>SEE: (model below)</b> Check the solution on pages 268-269 of your textbook.</p> <p><b>DO:</b> Use what you have learnt today to solve: PART 1: Do the questions on page 270 of the textbook</p> <p>Check your answers below before moving on to: PART 2: Complete worksheet 1, Chapter 14, page 181 of your workbook.</p> <p>If you would like further practice try these: <a href="https://www.knowtheromans.co.uk/roman-numerals/quiz/">https://www.knowtheromans.co.uk/roman-numerals/quiz/</a></p>	<p><b>(Lesson 2 resources below)</b> <b>MAKING LINKS:</b> Yesterday we wrote Roman numerals up to 1000. Today we will be writing 1000s using Roman numerals.</p> <p><b>THINK: (support below)</b> Can you help me with this problem? We sometimes see Roman numerals on buildings to show the year they were built. My friend saw this number, MDCCCXXV. Can you help him work out what year it shows?</p> <p>Our problem is in the textbook on page 271. Look at it now.</p> <p><b>SEE: (model below)</b> Check the solutions for both methods on pages 271-272 of your textbook.</p> <p><b>DO:</b> PART 1: Do questions on page 272-273 of the textbook.</p> <p>Check your answers below before moving on to: PART 2: Complete worksheet 2, Chapter 14, pages 182 - 183 of the workbook.</p> <p>If you would like further practice try these: <a href="https://www.knowtheromans.co.uk/roman-numerals/quiz/">https://www.knowtheromans.co.uk/roman-numerals/quiz/</a></p>	<p><b>(Lesson 3 resources below)</b> <b>MAKING LINKS:</b> Earlier in the year we worked with formal addition methods. Today we will be continuing with that.</p> <p><b>THINK: (support below)</b> Can you help me with this problem? My friend has digit cards: 0, 1, 2, 3, 4, 5, 6, 7, 8, 9. She makes two 5-digit numbers. What is the greatest sum, or total, she could make? What is the smallest total?</p> <p><i>If you have online parent access this lesson is based on Year 5 textbook 5A, chapter 2, lesson 8.</i></p> <p><b>SEE: (model below)</b> Check here to recap the formal method from year 5 for <a href="#">addition</a>.</p> <p><b>DO:</b> PART 1: Complete the questions below. Remember to round each amount before you start. This will help you check that your answers make sense.</p> <p>Check your answers below before moving on to: PART 2: Complete the calculations below.</p>	<p><b>(Lesson 4 resources below)</b> <b>MAKING LINKS:</b> Yesterday we worked with formal addition methods. Today we will be continuing with that.</p> <p><b>THINK: (support below)</b> Can you help me with this problem? My friend has digit cards: 0, 1, 2, 3, 4, 5, 6, 7, 8, 9. He makes two 5-digit numbers. What is the smallest difference he can make?</p> <p><i>If you have online parent access this lesson is based on Year 5 textbook 5A, chapter 2, lesson 10.</i></p> <p><b>SEE: (model below)</b> Check here to recap the formal method from year 5 for <a href="#">subtraction</a>.</p> <p><b>DO:</b> PART 1: Complete the questions below. Remember to round each amount before you start. This will help you check that your answers make sense.</p> <p>Check your answers below before moving on to: PART 2: Complete the calculations below.</p>	<p><b>(Lesson 5 resources below)</b> <b>MAKING LINKS:</b> This week we worked with formal addition and subtraction methods. Today we will be using these to solve word problems</p> <p><b>THINK: (support below)</b> Can you help me with this problem? Look at the chart below. The amounts are written in yen which is Japan's currency. After paying for rent and food, how much of her salary does Holly have remaining?</p> <p><i>If you have online parent access this lesson is based on Year 5 textbook 5A, chapter 2, lesson 7.</i></p> <p><b>SEE: (model below)</b> Check here to recap the formal methods from year 5 for <a href="#">addition and subtraction</a>.</p> <p><b>DO:</b> PART 1: Complete the questions below. Remember to round each amount before you start. This will help you check that your answers make sense.</p> <p>Check your answers below before moving on to: PART 2: Complete the calculations below.</p>
Methods, tips, clues & checks	Day 1 resources and answers (below)	Day 2 resources and answers (below)	Day 3 resources and answers (below)	Day 4 resources and answers (below)	Day 5 resources and answers (below)

See below for resources to support you to THINK-SEE-DO

## DAY 1 RESOURCES:

**THINK:** Our problem is on textbook page 268.

My friend says all Roman numerals are based around just seven symbols, I, V, X, L, C, D and M.

Is that true?

**DO:** Use what you have learnt today to solve:

PART 1: Do the questions on page 270 of the textbook

Check your answers below before moving on to:

PART 2: Complete worksheet 1, Chapter 14, page 181 of your workbook.

If you would like further practice try these:

<https://www.knowtheromans.co.uk/roman-numerals/quiz/>

### **DEEPENING:**

Complete the Mind Workout from your textbook, page 273.

**SEE:** Look at the different ways to solve the problem on page 268-269 of your textbook.

**I = 1, V = 5, X = 10, L = 50, C = 100, D = 500, M = 1000**

For these numbers you just have to repeat the symbols for 1, 10 or 100 as many times as needed. So, 30 = XXX because 3 is  $3 \times 10$ , or 3 tens.

**1, 2, 3 = I, II, III**

**10, 20, 30 = X, XX, XXX**

**100, 200, 300 = C, CC, CCC**

Something different happens when you write numbers above 3, 30 and 300.

To write 4 you need to write 1 less than 5. The symbol for 1 goes before the 5 to show it is 1 less than 5.

The same idea applies to 40 and 400 but it would be 10 or 100 less than 50 or 500.

4 is 1 less than 5 so **4 = IV**

40 is 10 less than 50 so **40 = XL**

400 is 100 less than 500 so **400 = CD**

To write numbers above 5, 50, 500 we combine the amounts to make the number. So, 700 = 500 + 100 + 100 and using Roman numerals that would be D + C + C = DCC

**6, 7, 8 = VI, VII, VIII**

**60, 70, 80 = LX, LXX, LXXX**

**600, 700, 800 = DC, DCC, DCCC**

To write 9, 90 and 900 we have to do something similar to how we write 4, 40 and 400. For these numbers we have to write the number as 1, 10 and 100 less than 10, 100 and 1000. So, 90 is 10 less than 100 and using Roman numerals that would be XC (X less than C).

**9 = IX**

**90 = XC**

**900 = CM**

**DAY 2 RESOURCES:**

**THINK:** Our problem is in the textbook on page 271.

We sometimes see Roman numerals on buildings to show the year they were built.

My friend saw this number, MDCCCXXV. Can you help him work out what year it shows?

**Note:** We call the digits we use nowadays, 0, 1, 2, 3, 4, 5, 6, 7, 8, 9, Arabic numerals (or Hindu-Arabic numerals).

**DO:** Use what you have learnt today to solve:

**PART 1:** Do questions on page 272-273 of the textbook.

Check your answers below before moving on to:

**PART 2:** Complete worksheet 2, Chapter 14, pages 182 - 183 of the workbook.

**DEEPENING:**

Complete the Mind Workout from your workbook, page 184.

**Interesting!**

You might find it interesting to see different numeral systems:

Numeral systems
0123456789
୧୨୩୪୫୬୭୮୯
I II III IV V VI VII VIII IX X
൦ ൧ ൨ ൩ ൪ ൫ ൬ ൭ ൮ ൯
൦ ൧ ൨ ൩ ൪ ൫ ൬ ൭ ൮ ൯
〇 一 二 三 四 五 六 七 八 九

They are Arabic numerals, Eastern Arabic numerals, Roman numerals, Bengali-Assamese numerals, Malayalam numerals, Thai numerals and Chinese numerals.

**SEE:** Check the solution on pages 271-272 of your textbook.

Can you remember the symbols for these amounts in Roman numerals? Check on yesterday's resource page if you need a reminder.

- 1, 2, 3, 4, 5, 6, 7, 8, 9
- 10, 20, 30, 40, 50, 60, 70, 80, 90
- 100, 200, 300, 400, 500, 600, 700, 800, 900

Remember the 7 symbols:

**I = 1, V = 5, X = 10, L = 50, C = 100, D = 500, M = 1000**

To convert between Arabic numerals (digits 0, 1, 2, 3, 4, 5, 6, 7, 8, 9) and Roman numerals we partition the number, breaking it up into **thousands**, **hundreds** (including 500s and 100s), **tens** (including 50s and 10s) and **ones** (including 5s and 1s).

**1888 = 1000 + 800 + 80 + 8**  
**= 1000 + 500+100+100+100 + 50+10+10+10 + 5+1+1+1**

Then we make each of those amounts with the correct combination of the 7 Roman numeral symbols.

**= M + D + C + C + C + L + X + X + X + V + I + I + I**  
**= MDCCCLXXXVII**

We can create a 'Roman numeral place value chart' to convert between Roman numerals and Arabic numerals:

Thousands	Hundreds		Tens		Ones	
M = 1000	D = 500	C = 100	L = 50	X = 10	V = 5	I = 1
M	D	CCC	L	XXX	V	III
1000	500	100+100+100	50	10+10+10	5	1+1+1

### DAY 3 RESOURCES:

**THINK:** If you have online parent access this lesson is based on textbook 5A, chapter 2, lesson 8.

My friend has digit cards: 0, 1, 2, 3, 4, 5, 6, 7, 8, 9. She makes two 5-digit numbers.

What is the greatest sum, or total, she could make?

What is the smallest total?

**DO:** Complete these:

PART 1:

a)  $98642 + 17530 =$

b)  $90357 + 12\ 468 =$

c)  $70258 + 31469 =$

d)  $53\ 026 + 47\ 189 =$

Check your answers below before moving on. Remember to estimate first.

PART 2:

$$\begin{array}{r} 68589 \\ + 40968 \\ \hline \end{array}$$

$$\begin{array}{r} 24651 \\ + 79654 \\ \hline \end{array}$$

$$\begin{array}{r} 76159 \\ + 31553 \\ \hline \end{array}$$

$$\begin{array}{r} 24841 \\ + 17161 \\ \hline \end{array}$$

$$\begin{array}{r} 35323 \\ + 12298 \\ \hline \end{array}$$

$$\begin{array}{r} 79088 \\ + 90079 \\ \hline \end{array}$$

$$\begin{array}{r} 70568 \\ + 71530 \\ \hline \end{array}$$

$$\begin{array}{r} 70967 \\ + 31178 \\ \hline \end{array}$$

$$\begin{array}{r} 73893 \\ + 32815 \\ \hline \end{array}$$

$$\begin{array}{r} 88075 \\ + 82081 \\ \hline \end{array}$$

$$\begin{array}{r} 19289 \\ + 54768 \\ \hline \end{array}$$

$$\begin{array}{r} 80817 \\ + 72618 \\ \hline \end{array}$$

$$\begin{array}{r} 78732 \\ + 85614 \\ \hline \end{array}$$

$$\begin{array}{r} 81396 \\ + 31369 \\ \hline \end{array}$$

$$\begin{array}{r} 47651 \\ + 37183 \\ \hline \end{array}$$

$$\begin{array}{r} 23284 \\ + 79185 \\ \hline \end{array}$$

**DEEPENING:**

Try the questions below. Check your answers with a calculator.

**SEE:** Check here to recap the formal method from year 5 for [addition](#).

First, make two 5-digit numbers:

$$98,765 + 43,210$$

Then, estimate the total of the two numbers:

$$98,765 + 43,210 = 100,000 + 40,000 = 140,000$$

Next, calculate the sum using the formal method of addition:

$$\begin{array}{r} 11 \\ 98\ 765 \\ + 43\ 210 \\ \hline 141\ 975 \end{array}$$

Add the ones.  
Add the tens.  
Add the hundreds.  
Add the thousands.  
Add the ten thousands.

If the total in the ones, tens, hundreds, thousands or 10 thousands place is 10 or more, rename it in the next highest place.

**NOTE:** Your parents may say 'carry the one' instead of saying 'rename'!

Try this one:

$$\begin{array}{r} 97\ 531 \\ + 86\ 420 \\ \hline \end{array}$$

And check:

$$\begin{array}{r} 11 \\ 97\ 531 \\ + 86\ 420 \\ \hline 183\ 951 \end{array}$$

Day 3 (continued):

<u>Adding three amounts:</u>				<u>Adding four amounts:</u>			
58875	82147	93856	62526	25189	43296	99764	49704
26394	56171	44383	17097	67853	81977	81614	85693
<u>+ 19706</u>	<u>+ 81961</u>	<u>+ 18490</u>	<u>+ 42941</u>	30899	21517	23993	50728
				<u>+ 70137</u>	<u>+ 36410</u>	<u>+ 86780</u>	<u>+ 37482</u>
88337	65037	66290	56784	66266	53772	91152	89747
12541	85925	27905	49022	23410	95144	75681	60832
<u>+ 44393</u>	<u>+ 79034</u>	<u>+ 92556</u>	<u>+ 82712</u>	53078	99223	37978	71761
				<u>+ 71823</u>	<u>+ 24348</u>	<u>+ 58602</u>	<u>+ 32909</u>
60367	51370	90868	38502	11492	37410	71894	17156
64460	98616	44884	91958	10550	56771	70153	55743
<u>+ 67237</u>	<u>+ 56300</u>	<u>+ 90086</u>	<u>+ 23278</u>	17647	99451	35165	95280
				<u>+ 93701</u>	<u>+ 57643</u>	<u>+ 90264</u>	<u>+ 35787</u>
18903	63026	91502	24331	50648	79493	22797	19915
56885	96498	81126	37367	56575	45567	48366	12676
<u>+ 17310</u>	<u>+ 84820</u>	<u>+ 35905</u>	<u>+ 33106</u>	86621	39859	24063	48965
				<u>+ 56357</u>	<u>+ 77412</u>	<u>+ 63381</u>	<u>+ 45567</u>

## DAY 4 RESOURCES:

**THINK:** If you have online parent access this lesson is based on textbook 5A, chapter 2, lesson 10.

My friend has digit cards: 0, 1, 2, 3, 4, 5, 6, 7, 8, 9.

He makes two 5-digit numbers.

What is the smallest difference he can make?

**Note:** Estimating the difference before calculating will give us a really good idea of how small our answer will be.

**DO:** Complete these:

**PART 1:**

$$41\ 837 - 29\ 058 = \text{[ ]}$$

$$41\ 837 - 10\ 939 = \text{[ ]}$$

$$341\ 837 - 19\ 605 = \text{[ ]}$$

$$341\ 837 - 124\ 519 = \text{[ ]}$$

Check your answers below before moving on. Remember to estimate.

**PART 2:**

$$\begin{array}{r} 93159 \\ - 41141 \\ \hline \end{array}$$

$$\begin{array}{r} 48357 \\ - 45558 \\ \hline \end{array}$$

$$\begin{array}{r} 61714 \\ - 53133 \\ \hline \end{array}$$

$$\begin{array}{r} 50876 \\ - 40050 \\ \hline \end{array}$$

$$\begin{array}{r} 60819 \\ - 31197 \\ \hline \end{array}$$

$$\begin{array}{r} 49128 \\ - 18365 \\ \hline \end{array}$$

$$\begin{array}{r} 97177 \\ - 78952 \\ \hline \end{array}$$

$$\begin{array}{r} 73336 \\ - 29185 \\ \hline \end{array}$$

$$\begin{array}{r} 84635 \\ - 77408 \\ \hline \end{array}$$

$$\begin{array}{r} 90736 \\ - 79306 \\ \hline \end{array}$$

$$\begin{array}{r} 52951 \\ - 25337 \\ \hline \end{array}$$

$$\begin{array}{r} 93485 \\ - 23053 \\ \hline \end{array}$$

$$\begin{array}{r} 60830 \\ - 20601 \\ \hline \end{array}$$

$$\begin{array}{r} 70964 \\ - 56224 \\ \hline \end{array}$$

$$\begin{array}{r} 80843 \\ - 33703 \\ \hline \end{array}$$

$$\begin{array}{r} 46398 \\ - 31910 \\ \hline \end{array}$$

**DEEPENING:**

Try the questions below. Check to your answers to part 1 deepening answers with a calculator.

**SEE:** Check here to recap the formal method from year 5 for [subtraction](#).

First, make two 5-digit numbers:  $70,123 - 69,854 =$

Then, estimate the difference between the two numbers:

$$70,123 - 69,854 = 70,000 - 70,000 = 0$$

We know zero cannot be correct as we are not subtracting the same amount that we started with but it does tell us the answer is very small. In this case, we might decide the best way to calculate the answer is to count on rather than to formally subtract!

Let's try these amounts:

$$90,123 - 87,654 =$$

Then, estimate the difference between the two numbers:

$$90,123 - 87,654 = 90,000 - 88,000 = 2,000$$

Next, calculate the sum using the formal method of subtraction:

$$\begin{array}{r} \begin{array}{cccccc} 8 & 9 & 10 & 11 & & \\ \color{red}{/} & \color{green}{/} & \color{blue}{/} & \color{red}{/} & & \\ 9 & 0 & 1 & 2 & 3 & \\ - & 8 & 7 & 6 & 5 & 4 \\ \hline & & & & & \\ 2 & 4 & 6 & 9 & & \end{array} \\ \hline \end{array}$$

Subtract the ones.  
Subtract the tens, the hundreds, the thousands and the 10 thousands.  
When there isn't enough to take from we must take and rename from the next higher place.  
We need more ones so we **take and rename a ten**, leaving 1 ten left.  
We need more tens so we **take and rename a hundred**, leaving 0 hundreds.  
We need more hundreds so we try to **take and rename a thousand**. BUT we don't have any thousands to take and rename so we must **take a ten thousand and rename it as thousands**. Now we have enough thousands to **take and rename a thousand**, leaving 9 thousands left.  
Finally we subtract our 10 thousands.

**NOTE:** Your parents may say 'borrow' or 'steal' instead of saying 'rename'!

**Day 4 (continued):**

**Subtracting across zero:**

$$\begin{array}{r} 57940 \\ - 13823 \\ \hline \end{array}$$

$$\begin{array}{r} 90720 \\ - 59113 \\ \hline \end{array}$$

$$\begin{array}{r} 20219 \\ - 14002 \\ \hline \end{array}$$

$$\begin{array}{r} 45026 \\ - 21705 \\ \hline \end{array}$$

$$\begin{array}{r} 60000 \\ - 59798 \\ \hline \end{array}$$

$$\begin{array}{r} 20008 \\ - 17550 \\ \hline \end{array}$$

$$\begin{array}{r} 30800 \\ - 13687 \\ \hline \end{array}$$

$$\begin{array}{r} 40030 \\ - 39101 \\ \hline \end{array}$$

$$\begin{array}{r} 80092 \\ - 44401 \\ \hline \end{array}$$

$$\begin{array}{r} 54060 \\ - 22404 \\ \hline \end{array}$$

$$\begin{array}{r} 92000 \\ - 81183 \\ \hline \end{array}$$

$$\begin{array}{r} 30802 \\ - 24261 \\ \hline \end{array}$$

$$\begin{array}{r} 98118 \\ - 54003 \\ \hline \end{array}$$

$$\begin{array}{r} 89208 \\ - 73055 \\ \hline \end{array}$$

$$\begin{array}{r} 54700 \\ - 12286 \\ \hline \end{array}$$

$$\begin{array}{r} 23203 \\ - 11170 \\ \hline \end{array}$$

**Subtraction with missing numbers:**

Take care – these problems include calculations that will need renaming to reach the answers.

$$\begin{array}{r} 35 \ 4 \\ - \ 202 \\ \hline 302 \end{array}$$

$$\begin{array}{r} 97 \ 7 \\ - 7 \ 74 \\ \hline 247 \_ \end{array}$$

$$\begin{array}{r} 702 \_ \\ - 25 \ 2 \\ \hline 4 \ 28 \end{array}$$

$$\begin{array}{r} 22 \ 9 \\ - \ 566 \\ \hline 683 \end{array}$$

$$\begin{array}{r} 7 \ 11 \\ - \ 7 \ 6 \\ \hline 400 \_ \end{array}$$

$$\begin{array}{r} \ 268 \\ - \ 92 \ 0 \\ \hline 58 \end{array}$$

$$\begin{array}{r} 59 \ 0 \\ - 3 \ 28 \\ \hline \_ 50 \_ \end{array}$$

$$\begin{array}{r} 5 \ 92 \\ - 49 \ 3 \\ \hline 469 \end{array}$$

$$\begin{array}{r} 1986 \\ - 14 \ 0 \\ \hline 496 \end{array}$$

$$\begin{array}{r} 8908 \\ - 79 \ 8 \\ \hline 950 \end{array}$$

$$\begin{array}{r} 7 \ 9 \\ - 7640 \\ \hline 52 \end{array}$$

$$\begin{array}{r} 74 \ 6 \\ - 1 \ 74 \\ \hline 613 \_ \end{array}$$

$$\begin{array}{r} 26 \ 6 \\ - 2465 \\ \hline 161 \end{array}$$

$$\begin{array}{r} 56 \ 1 \\ - 2 \ 84 \\ \hline 314 \_ \end{array}$$





$$\begin{array}{r} 8 \ 14 \\ - 336 \_ \\ \hline 47 \ 3 \end{array}$$

**DAY 5 RESOURCES:**

**THINK:** If you have online parent access this lesson is based on textbook 5A, chapter 2, lesson 7.

Look at the chart below. The amounts are written in yen which is Japan's currency.

After paying for rent and food, how much of her salary does Holly have remaining?

	Sam	Holly
 rent / month	225 000 yen	280 000 yen
 utilities / month	30 000 yen	Included in rent
 food / month	80 000 yen	65 000 yen
 salary / month	550 000 yen	600 000 yen

**DO: PART 1:**

$99706$	$26594$	$24205$	$25908$
$- 23064$	$+ 42181$	$- 12152$	$+ 15280$
$57500$	$31771$	$36119$	$92819$
$- 26428$	$+ 71161$	$+ 10264$	$- 21706$
$95030$	$68796$	$80883$	$57476$
$- 41802$	$- 37370$	$- 23300$	$+ 10517$

Check your answers below before moving on to:

**PART 2:** Complete the word problems:

1. Brandon runs his own baking company. This morning, Brandon's workers baked 18,546 blueberry pies. They also baked some more after lunch. In total, they baked 26,039 blueberry pies. How many blueberry pies did Brandon's workers bake after lunch?

2. Claudia decided to close her comic book store, so she is selling some of her 61,002 comic books. She now has 2,948 comic books left. How many comic books has Claudia sold?

**SEE:** Refer to resources from day 3 and 4 to see our addition and subtraction methods.

Check here to recap the formal methods from year 5 for [addition and subtraction](#).

$$\begin{array}{r} 280\ 000 \\ + 65\ 000 \\ \hline 345\ 000 \end{array}$$

Holly spent 345,000 yen on food and rent.

$$600\ 000 - 345\ 000 =$$

Holly had 255,000 yen remaining.

You could use column subtraction.

Or you could subtract 10s, 100s, 1000s like this.

$$\begin{array}{r} 600 \\ \swarrow \quad \downarrow \quad \searrow \\ 500 \quad 90 \quad 10 \\ - 300 \quad - 40 \quad - 5 \\ \hline 200 \quad 50 \quad 5 \end{array}$$

Remember also our strategies for solving word problems:

1. Read and understand the problem, first.
2. Plan a way to reach an answer, including what calculations you will need to do to find the answer.
3. Do the calculations.
4. Check the answer makes sense in the context of the questions. Writing our answering sentence or statement helps us to check that our calculation has answered the problem!

(DO continued)

3. So far, an orchard has sold a combined total of 20,001 kilograms of fresh and frozen fruit this season. If they have sold 5,942 kilograms of frozen fruit, how many kilograms of fresh fruit have been sold so far?

4. A monument was originally made with 34,161 sandstone blocks and 27,998 limestone blocks. If, during renovations, a combined total of 3,673 blocks were replaced how many of the original blocks remained?

5. Recently, the value of Dwaine's university savings fund decreased by £3,852. He also had to spend £1,230 of it on books. If his fund was worth £18,001 before, how much is it worth now?

**DEEPENING:**

Write your own 2-step problems (like those in question 4 and 5) and the solution to share with your teacher. Remember to use 5-digit numbers.



## ANSWERS – part 1:

<u>Day 1</u>	<u>Day 2</u>	<u>Day 3</u>	<u>Day 4</u>	<u>Day 5</u>																																				
<p><u>Part 1:</u> Q.1: a) XXVII, b) CDXXVII</p> <p>Q.2: CXXV</p> <p>Q.3: 168</p>	<p><u>Part 1:</u> Q.1: 2016 Q.2: a) 1454, b) 36 years old Q.3 :</p> <p><b>1908 4th MCMVIII</b> <b>1948 14th MCMXLVIII</b> <b>2012 30th MMXII</b></p>	<p><u>Part 1:</u> a) 116 172 b) 102 825 c) 101 727 d) 100 215</p>	<p><u>Part 1:</u> 41 837 – 29 058 = <b>12 779</b></p> <p>41 837 – 10 939 = <b>30 898</b></p> <p>341 837 – 19 605 = <b>322 232</b></p> <p>341 837 – 124 519 = <b>217 318</b></p>	<p><u>Part 1:</u></p> <table><tbody><tr><td>99706</td><td>26594</td><td>24205</td><td>25908</td></tr><tr><td>- 23064</td><td>+ 42181</td><td>- 12152</td><td>+ 15280</td></tr><tr><td>76642</td><td>68775</td><td>12053</td><td>41188</td></tr><tr><td>57500</td><td>31771</td><td>36119</td><td>92819</td></tr><tr><td>- 26428</td><td>+ 71161</td><td>+ 10264</td><td>- 21706</td></tr><tr><td>31072</td><td>102932</td><td>46383</td><td>71113</td></tr><tr><td>95030</td><td>68796</td><td>80883</td><td>57476</td></tr><tr><td>- 41802</td><td>- 37370</td><td>- 23300</td><td>+ 10517</td></tr><tr><td>53228</td><td>31426</td><td>57583</td><td>67993</td></tr></tbody></table>	99706	26594	24205	25908	- 23064	+ 42181	- 12152	+ 15280	76642	68775	12053	41188	57500	31771	36119	92819	- 26428	+ 71161	+ 10264	- 21706	31072	102932	46383	71113	95030	68796	80883	57476	- 41802	- 37370	- 23300	+ 10517	53228	31426	57583	67993
99706	26594	24205	25908																																					
- 23064	+ 42181	- 12152	+ 15280																																					
76642	68775	12053	41188																																					
57500	31771	36119	92819																																					
- 26428	+ 71161	+ 10264	- 21706																																					
31072	102932	46383	71113																																					
95030	68796	80883	57476																																					
- 41802	- 37370	- 23300	+ 10517																																					
53228	31426	57583	67993																																					

## ANSWERS – part 2 and deepening:

### Day 1

Part 2: Workbook,

Q.1:

- a) XXVI, b) XXXIX, c) LIII,  
d) LXXXVIII, e) CCL, f) CDXLIV,  
g) DVII, h) DCXXI, i) DCCLXV,  
j) CMXCIX.

Q.2:

DLV	777
DCCLXXVII	542
DXLII	727
DCIX	609
	555

#### DEEPENING:

$$\text{III} = \text{IV} - \text{I}$$

$$3 = 4 - 1$$

$$\text{IX} - \text{VI} = \text{III}$$

$$9 - 6 = 3$$

### Day 2

Part 2: Workbook,

Q.1:

- Newton = MDCXLII –  
MDCCXXVII  
Einstein = MDCCCLXXIX –  
MCMLV  
Piaget = MDCCCXCVI –  
MCMLXXX  
Nash – MCMXXVIII - MMXV

Q.2:

In order:

Year of independence in Roman numerals
MCCXXXVIII
MDLXXXI
MDCCCLXXVI
MCMI
MCMXLVII
MCMLXIII
MCMLXV
MMVI

#### DEEPENING:

$$\text{MDCLXVI} - \text{MDCLXIV} = \text{II}$$

$$1666 - 1664 = 2$$

The difference is 2, written as the Roman numeral II.

### Day 3

Part 2:

68589	24651	76159	24841
+ 40968	+ 79654	+ 31553	+ 17161
109557	104305	107712	42002

35323	79088	70568	70967
+ 12298	+ 90079	+ 71530	+ 31178
47621	169167	142098	102145

73893	88075	19289	80817
+ 32815	+ 82081	+ 54768	+ 72618
106708	170156	74057	153435

78732	81396	47651	23284
+ 85614	+ 31369	+ 37183	+ 79185
164346	112765	84834	102469

#### DEEPENING:

Use a calculator to check your answers.

### Day 4

Part 2:

93159	48357	61714	50876
- 41141	- 45558	- 53133	- 40050
52018	2799	8581	10826

60819	49128	97177	73336
- 31197	- 18365	- 78952	- 29185
29622	30763	18225	44151

84635	90736	52951	93485
- 77408	- 79306	- 25337	- 23053
7227	11430	27614	70432

60830	70964	80843	46398
- 20601	- 56224	- 33703	- 31910
40229	14740	47140	14488

#### DEEPENING:

Part 1: Use a calculator to check your answers.

Part 2:

3504	9747	7020	2249	7711
- 3202	- 7274	- 2592	- 1566	- 3706
302	2473	4428	683	4005

9268	5930	5392	1986	8908
- 9210	- 3428	- 4923	- 1490	- 7958
58	2502	469	496	950

7692	7406	2626	5631	8114
- 7640	- 1274	- 2465	- 2484	- 3361
52	6132	161	3147	4753

### Day 5

Part 2:

- 7,493 pies were baked after lunch.
- Claudia has sold 58,054 comic books.
- 14,059 kilograms of fresh fruit have been sold so far.
- 58,486 of the original blocks remained.
- Dwayne's university fund is now worth £12,919.

#### Deepening:

Share your problem and its solution with your teacher.